



# Cambridge International AS & A Level

---

**GEOGRAPHY**

**9696/13**

Paper 1 Core Physical Geography

**October/November 2020**

INSERT

**1 hour 30 minutes**

---

**INFORMATION**

- This insert contains all the resources referred to in the questions.
- You may annotate this insert and use the blank spaces for planning. **Do not write your answers** on the insert.



---

This document has 4 pages. Blank pages are indicated.

Fig. 1.1 for Question 1

A hydrograph for two storm events

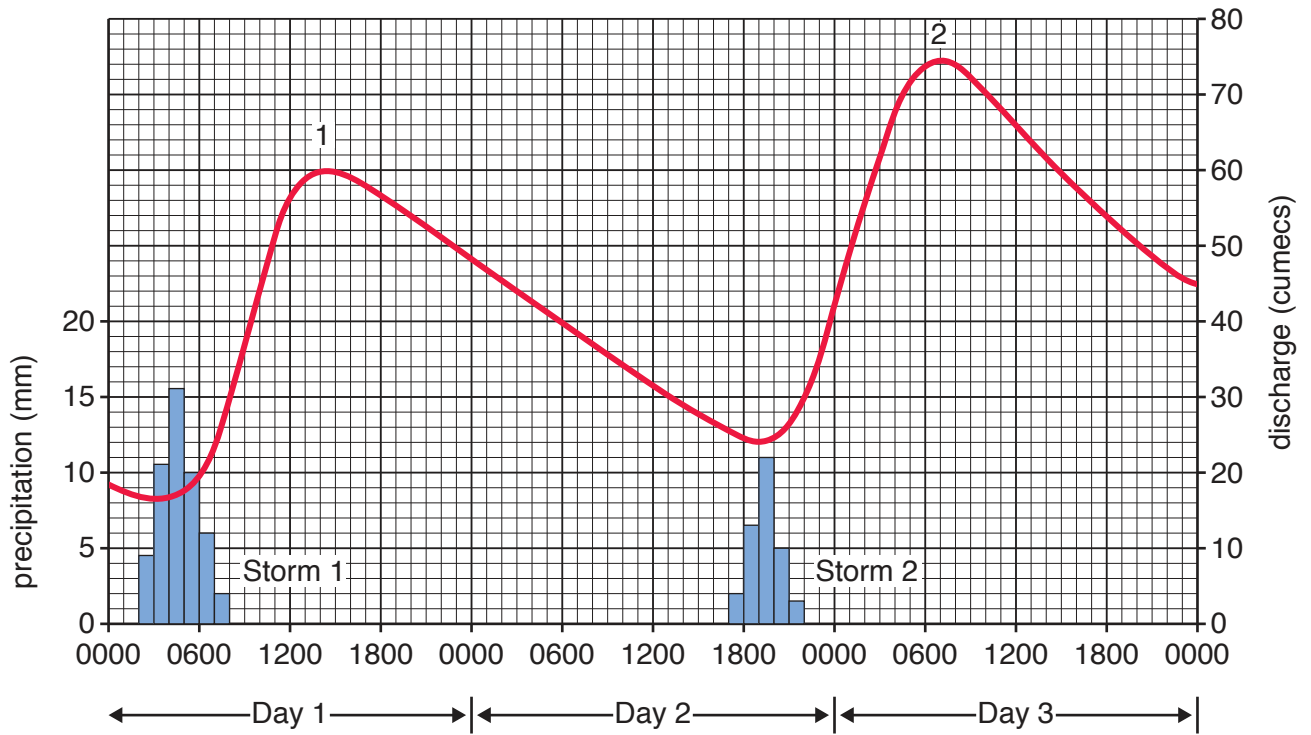
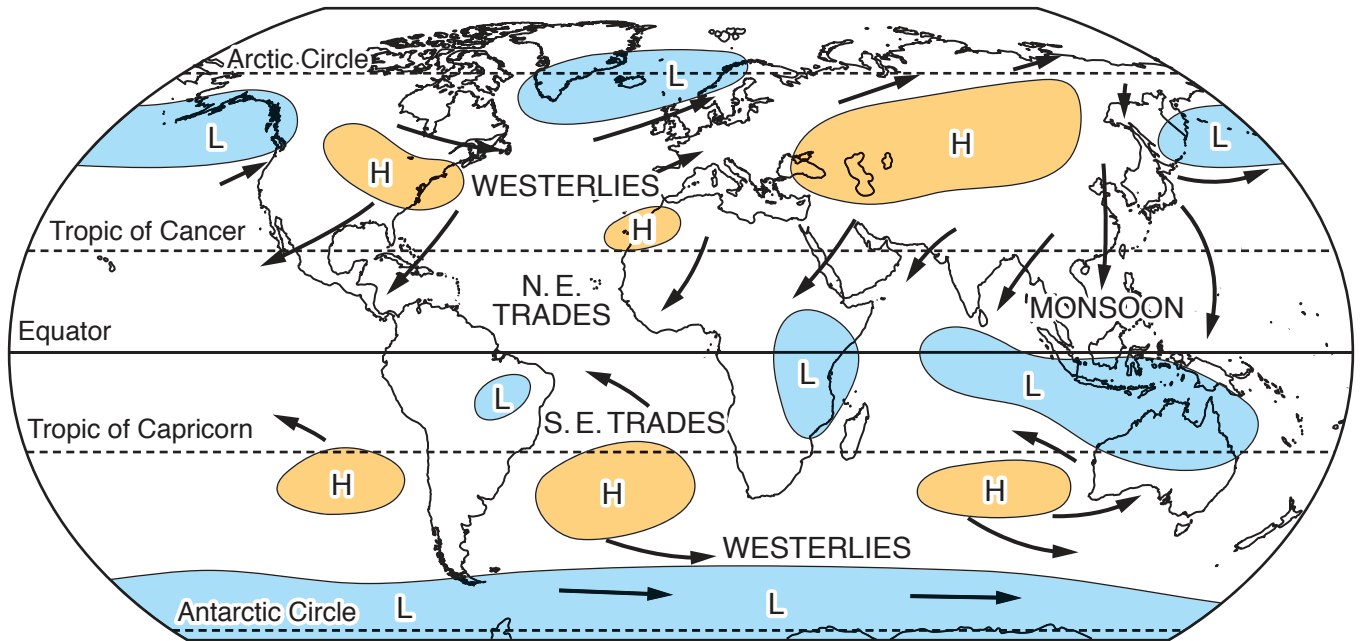


Fig. 2.1 for Question 2

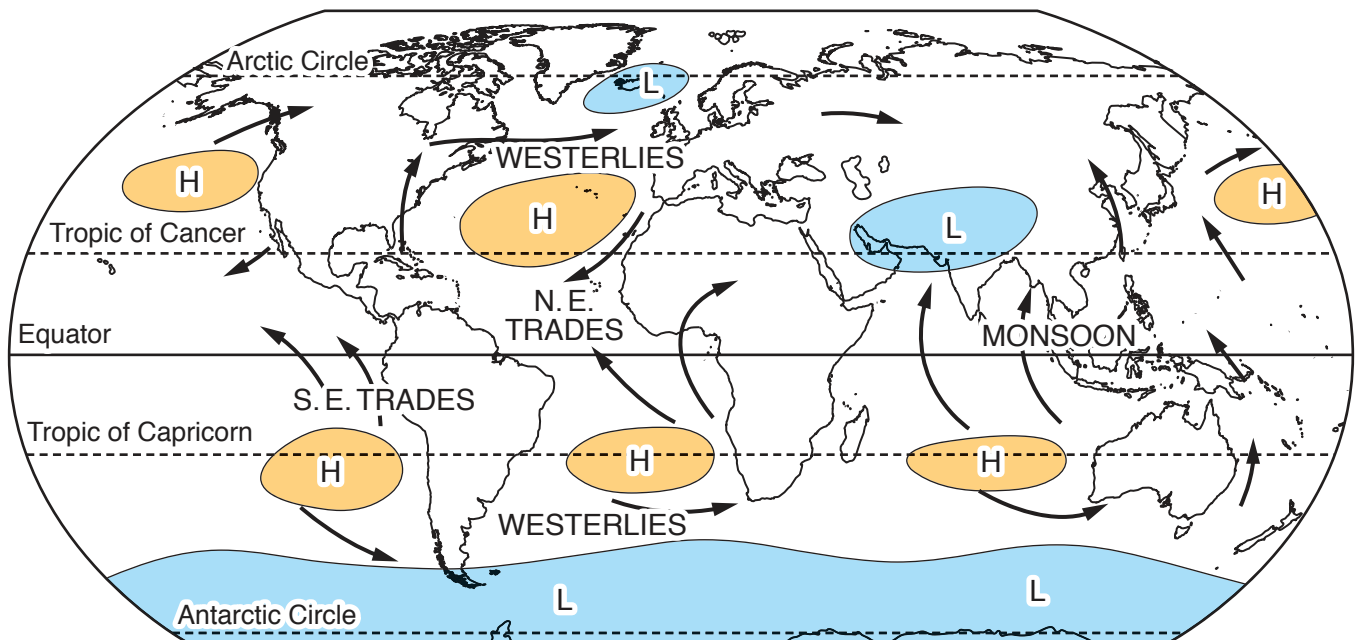
Major pressure systems and wind belts at the Earth's surface in January and July

January



Key **H** high pressure **L** low pressure  $\longrightarrow$  prevailing wind

July



Key **H** high pressure **L** low pressure  $\longrightarrow$  prevailing wind

**Fig. 3.1 for Question 3****An eroded landscape in Kenya**

---

Permission to reproduce items where third-party owned material protected by copyright is included has been sought and cleared where possible. Every reasonable effort has been made by the publisher (UCLES) to trace copyright holders, but if any items requiring clearance have unwittingly been included, the publisher will be pleased to make amends at the earliest possible opportunity.

To avoid the issue of disclosure of answer-related information to candidates, all copyright acknowledgements are reproduced online in the Cambridge Assessment International Education Copyright Acknowledgements Booklet. This is produced for each series of examinations and is freely available to download at [www.cambridgeinternational.org](http://www.cambridgeinternational.org) after the live examination series.

Cambridge Assessment International Education is part of the Cambridge Assessment Group. Cambridge Assessment is the brand name of the University of Cambridge Local Examinations Syndicate (UCLES), which itself is a department of the University of Cambridge.